



Count the amount of each of the different objects.

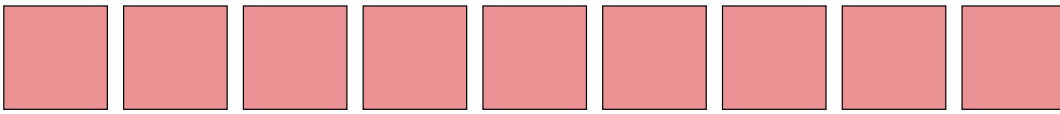
1)



2)




3)



4)




5)



6)



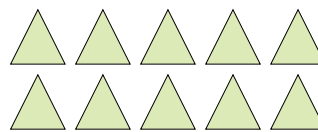
7)



8)



9)



Answers

1. _____

2. _____

3. _____

4. _____

5. _____

6. _____

7. _____

8. _____

9. _____



Count the amount of each of the different objects.

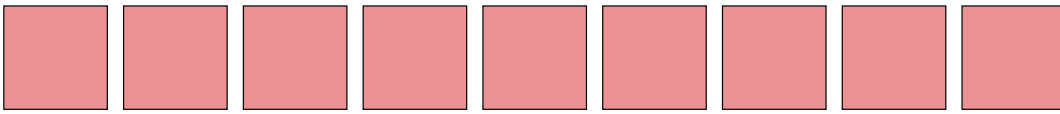
1)



2)




3)



4)




5)



6)



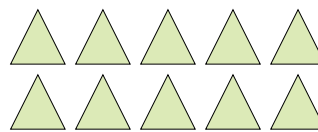
7)



8)



9)



Answers

1. 7

2. 7

3. 9

4. 16

5. 18

6. 13

7. 12

8. 8

9. 10



Count the amount of each of the different objects.

1)



2)



3)




4)



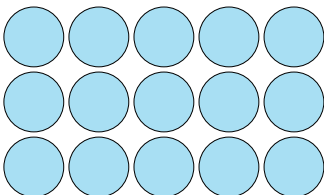
5)



6)



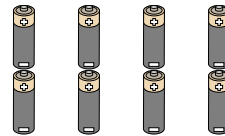
7)



8)



9)



Answers

1. _____

2. _____

3. _____

4. _____

5. _____

6. _____

7. _____

8. _____

9. _____



Count the amount of each of the different objects.

1)



2)




3)




4)



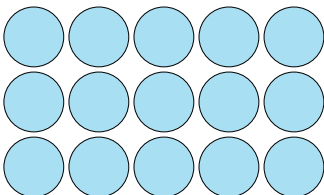
5)



6)



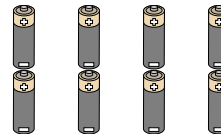
7)



8)



9)



Answers

1. 12

2. 19

3. 2

4. 9

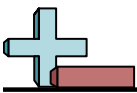
5. 14

6. 20

7. 15

8. 20

9. 8



Count the amount of each of the different objects.

1)



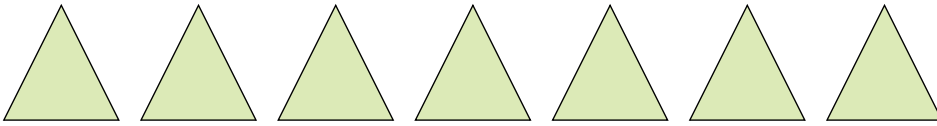
2)




3)



4)



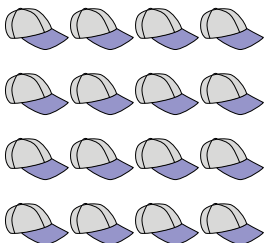
5)




6)




7)



8)



9)



Answers

1. _____

2. _____

3. _____

4. _____

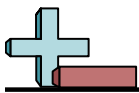
5. _____

6. _____

7. _____

8. _____

9. _____



Count the amount of each of the different objects.

1)



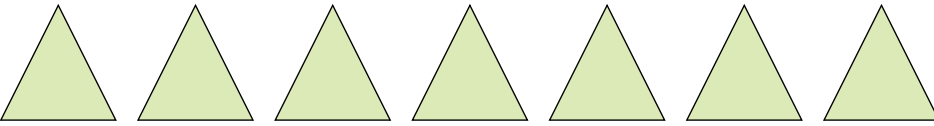
2)




3)



4)



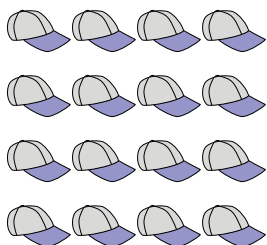
5)




6)




7)



8)



9)



Answers

1. 3

2. 17

3. 7

4. 7

5. 5

6. 16

7. 16

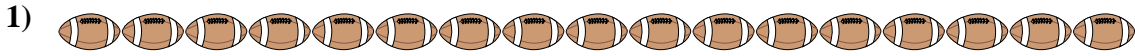
8. 6

9. 9

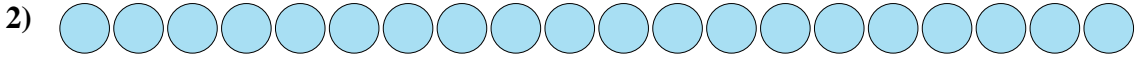


Count the amount of each of the different objects.


Answers



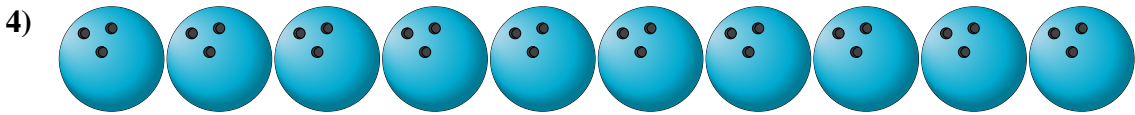
1. _____




2. _____



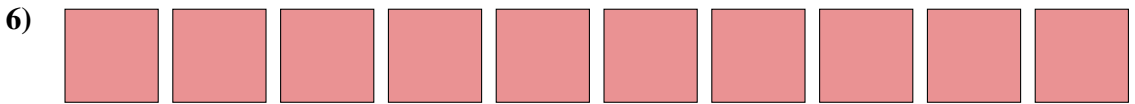
3. _____




4. _____



5. _____



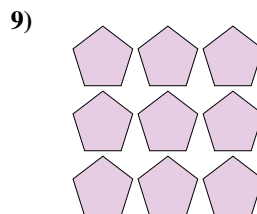
6. _____



7. _____



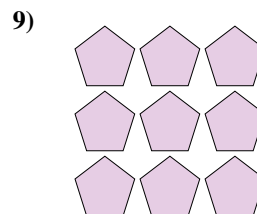


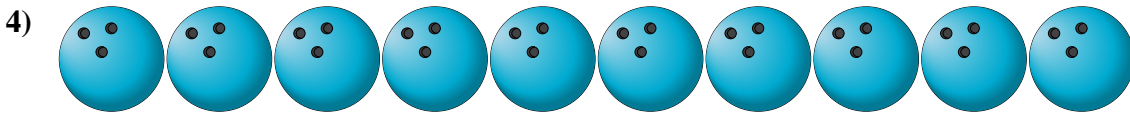

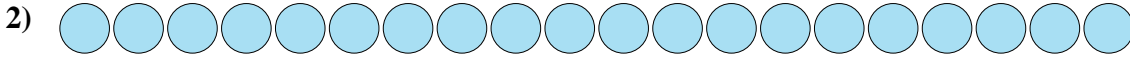
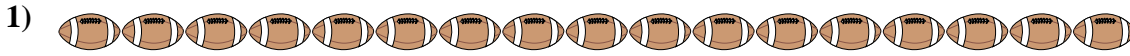
8. _____



9. _____



Count the amount of each of the different objects.



Answers

1. 17

2. 20

3. 3

4. 10

5. 13

6. 10

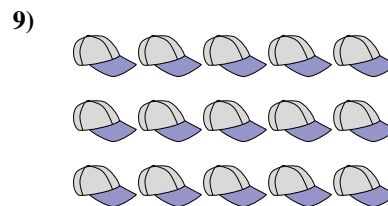
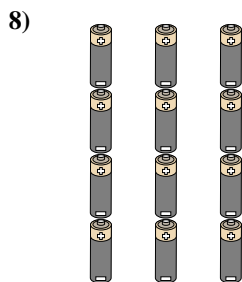


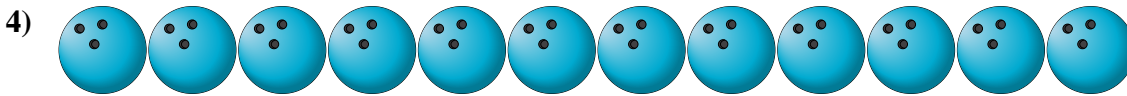

7. 9

8. 16

9. 9



Count the amount of each of the different objects.

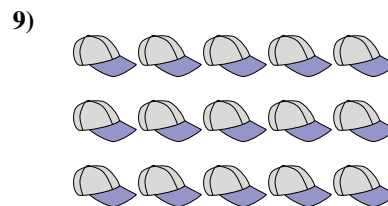
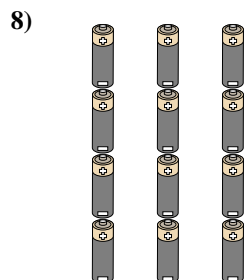


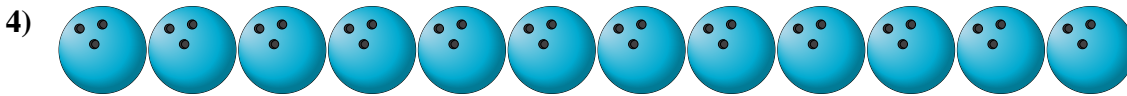



Answers

- 1. _____
- 2. _____
- 3. _____
- 4. _____
- 5. _____
- 6. _____
- 7. _____
- 8. _____
- 9. _____



Count the amount of each of the different objects.



Answers

1. 20

2. 18

3. 5

4. 12

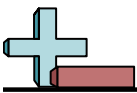
5. 5

6. 18

7. 12

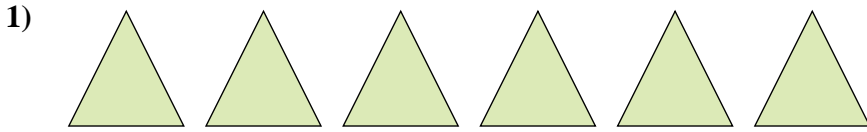
8. 12

9. 15



Count the amount of each of the different objects.

Answers




1. _____



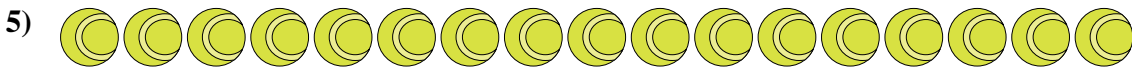
2. _____



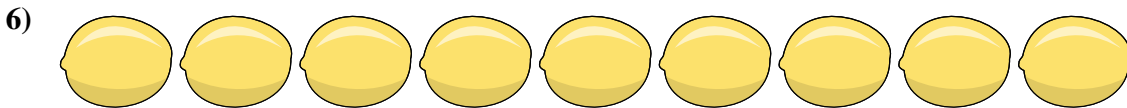
3. _____




4. _____




5. _____



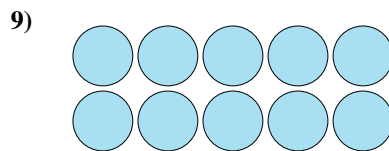
6. _____



7. _____



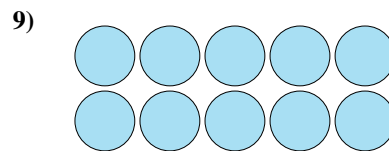

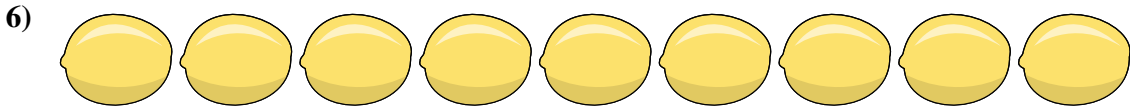
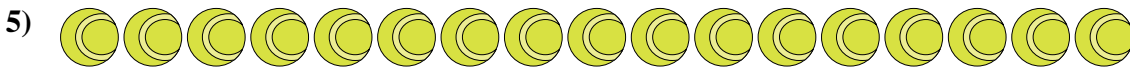
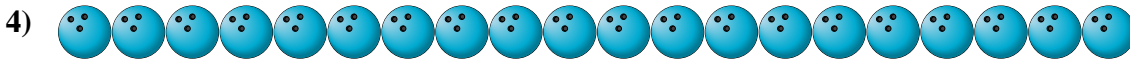

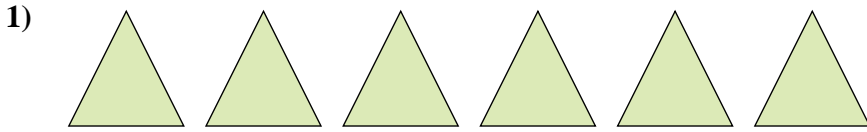
8. _____



9. _____



Count the amount of each of the different objects.



Answers

1. 6

2. 16

3. 15

4. 20

5. 17

6. 9

7. 12

8. 15

9. 10



Count the amount of each of the different objects.


1)



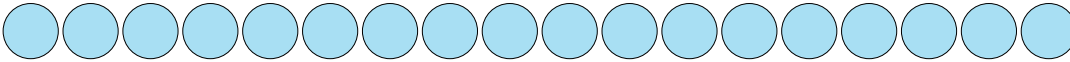
2)



3)



4)




5)



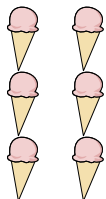
6)



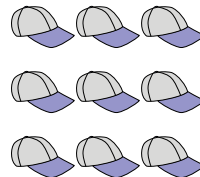
7)



8)



9)



Answers

1. _____

2. _____

3. _____

4. _____

5. _____

6. _____

7. _____

8. _____

9. _____



Count the amount of each of the different objects.


1)



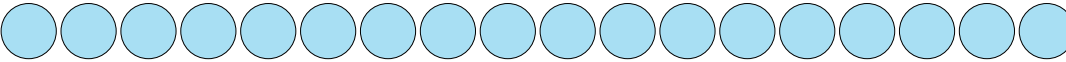
2)



3)



4)




5)



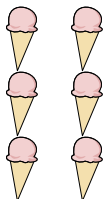
6)



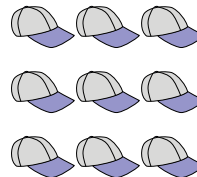
7)



8)



9)



Answers

1. 7

2. 11

3. 10

4. 18

5. 4

6. 19


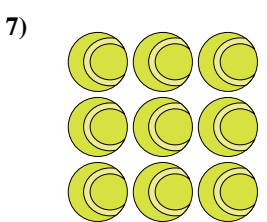
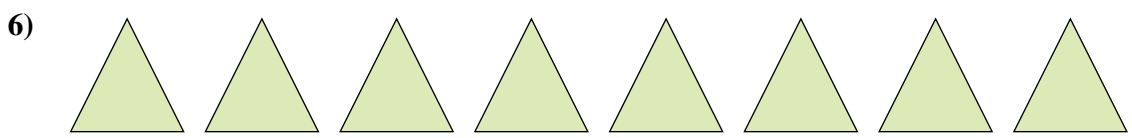


7. 8

8. 6

9. 9



Count the amount of each of the different objects.


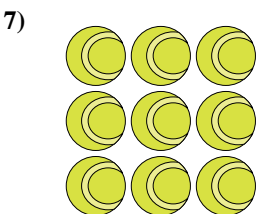
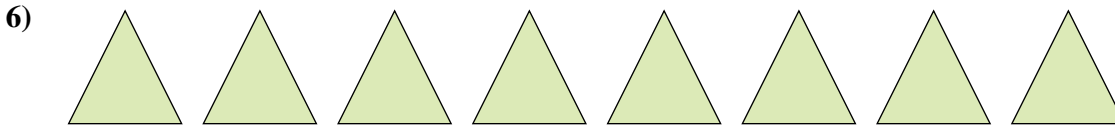




Answers

- 1. _____
- 2. _____
- 3. _____
- 4. _____
- 5. _____
- 6. _____
- 7. _____
- 8. _____
- 9. _____



Count the amount of each of the different objects.



Answers

1. 17

2. 19

3. 17

4. 6

5. 9

6. 8

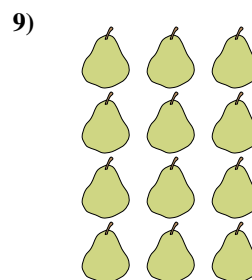

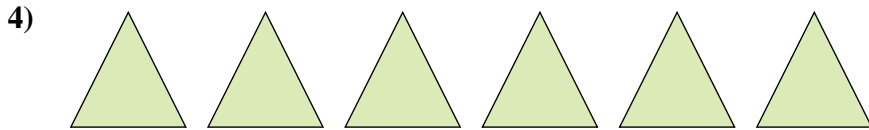
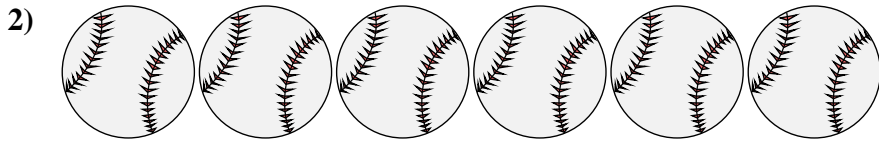
7. 9

8. 20

9. 12



Count the amount of each of the different objects.




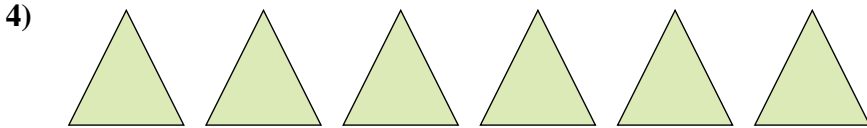
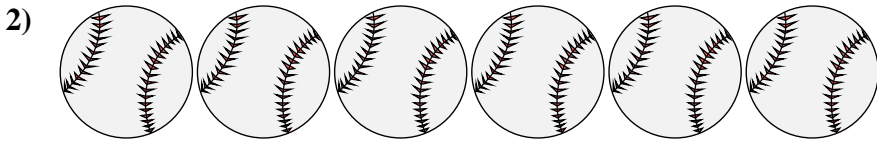


Answers

- 1. _____
- 2. _____
- 3. _____
- 4. _____
- 5. _____
- 6. _____
- 7. _____
- 8. _____
- 9. _____



Count the amount of each of the different objects.



Answers

1. 20

2. 6

3. 5

4. 6

5. 16

6. 4

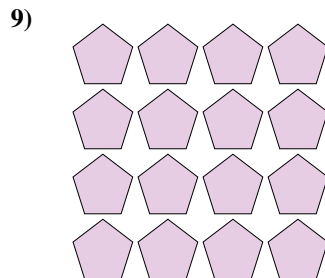

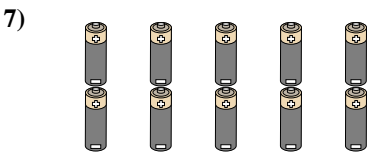


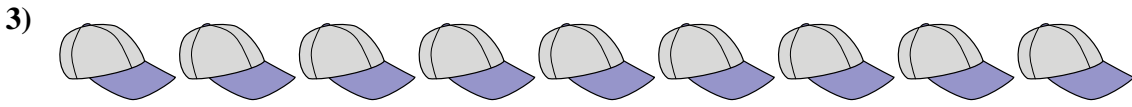

7. 8

8. 4

9. 12



Count the amount of each of the different objects.

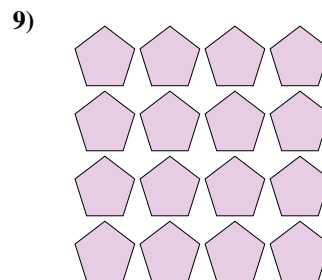

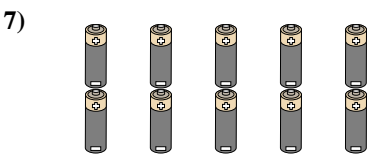


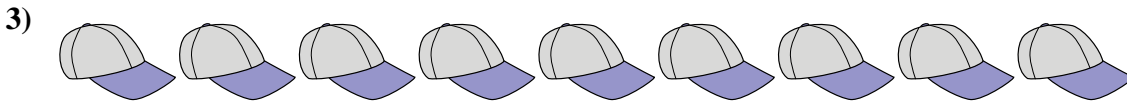


Answers

- 1. _____
- 2. _____
- 3. _____
- 4. _____
- 5. _____
- 6. _____
- 7. _____
- 8. _____
- 9. _____



Count the amount of each of the different objects.



Answers

1. 17

2. 2

3. 9

4. 8

5. 2

6. 9

7. 10

8. 15

9. 16